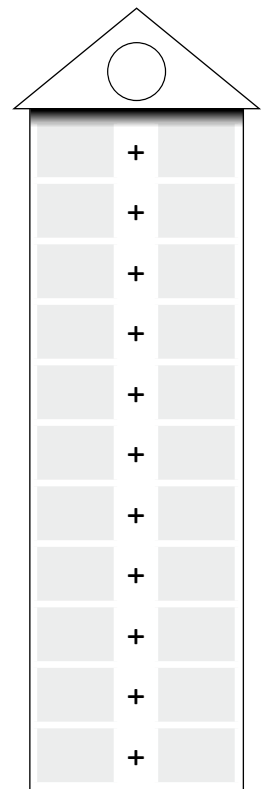
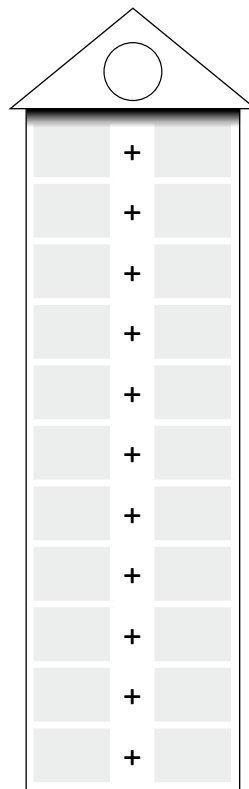
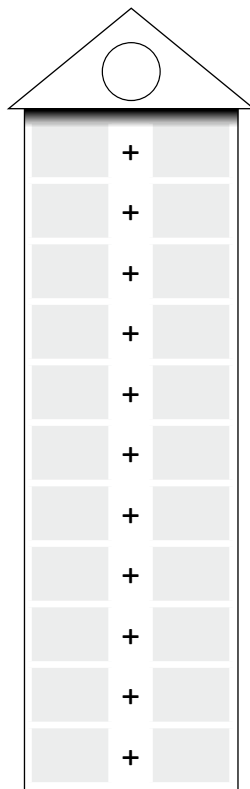



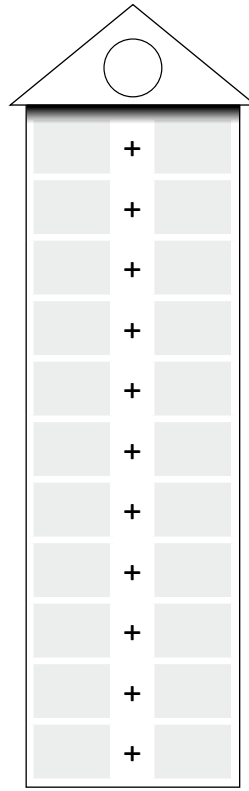





Zahlenhäuser

Name:

Klasse:

Datum:

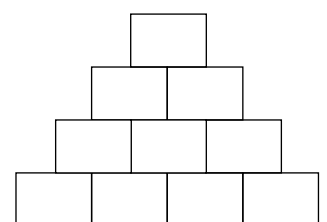
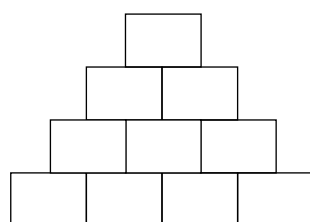
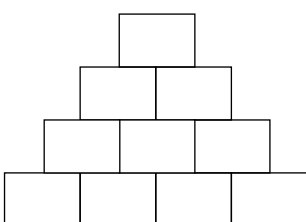
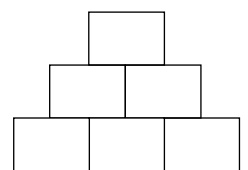
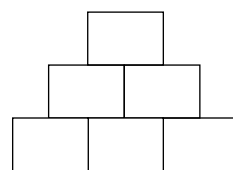
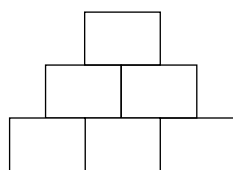
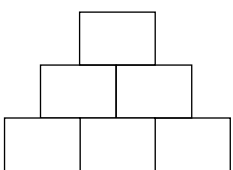
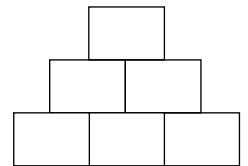
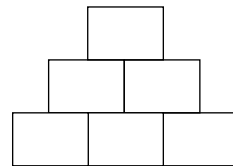
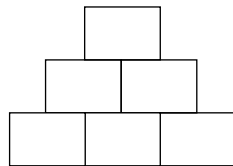
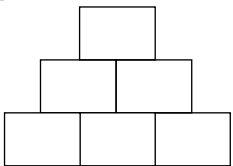
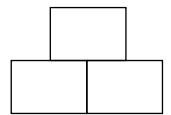
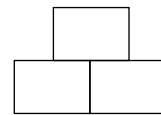
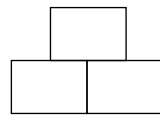
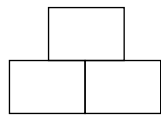
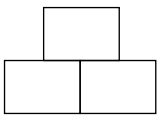
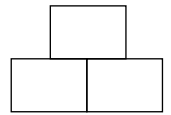
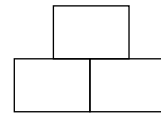
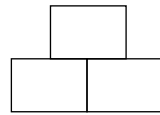
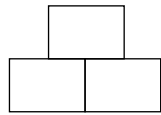
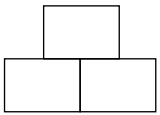
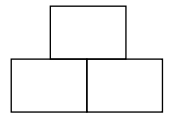
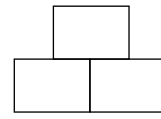
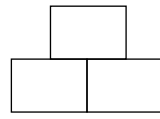
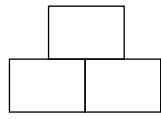
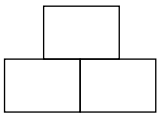


Zahlenmauern

Name:

Klasse:

Datum:




Zehner und Einer / Hunderterfeld

Name:


Klasse:

Datum:




Z	E	Zahl

$$\square = \square + \square$$




Z	E	Zahl

$$\square = \square + \square$$




Z	E	Zahl

$$\square = \square + \square$$




Z	E	Zahl

$$\square = \square + \square$$




Z	E	Zahl

$$\square = \square + \square$$




Z	E	Zahl

$$\square = \square + \square$$




Z	E	Zahl

$$\square = \square + \square$$



Z	E	Zahl

$$\square = \square + \square$$



Z	E	Zahl

$$\square = \square + \square$$

Zehner und Einer / Strich-Punkt-Darstellung

Name:

Klasse:

Datum:

Z	E	Zahl
<input type="text"/>	<input type="text"/>	<input type="text"/>
<input type="text"/>	=	<input type="text"/>

Z	E	Zahl
<input type="text"/>	<input type="text"/>	<input type="text"/>
<input type="text"/>	=	<input type="text"/>

Z	E	Zahl
<input type="text"/>	<input type="text"/>	<input type="text"/>
<input type="text"/>	=	<input type="text"/>

Z	E	Zahl
<input type="text"/>	<input type="text"/>	<input type="text"/>
<input type="text"/>	=	<input type="text"/>

Z	E	Zahl
<input type="text"/>	<input type="text"/>	<input type="text"/>
<input type="text"/>	=	<input type="text"/>

Z	E	Zahl
<input type="text"/>	<input type="text"/>	<input type="text"/>
<input type="text"/>	=	<input type="text"/>

Z	E	Zahl
<input type="text"/>	<input type="text"/>	<input type="text"/>
<input type="text"/>	=	<input type="text"/>

Z	E	Zahl
<input type="text"/>	<input type="text"/>	<input type="text"/>
<input type="text"/>	=	<input type="text"/>

Z	E	Zahl
<input type="text"/>	<input type="text"/>	<input type="text"/>
<input type="text"/>	=	<input type="text"/>

Hundertertafel und Ausschnitte aus der Hundertertafel

Name:

Klasse:

Datum:

Zahlenstrahl

Name:

Klasse:

Datum:






Rechenstrich

Name:

Klasse:

Datum:



Erst Zehner dazu, dann Einer dazu

Name:

Klasse:

Datum:

$$\begin{array}{r} + \quad = \square \\ \hline \square + \square = \square \\ \square + \square = \square \end{array}$$

$$\begin{array}{r} + \quad = \square \\ \hline \square + \square = \square \\ \square + \square = \square \end{array}$$

$$\begin{array}{r} + \quad = \square \\ \hline \square + \square = \square \\ \square + \square = \square \end{array}$$

$$\begin{array}{r} + \quad = \square \\ \hline \square + \square = \square \\ \square + \square = \square \end{array}$$

$$\begin{array}{r} + \quad = \square \\ \hline \square + \square = \square \\ \square + \square = \square \end{array}$$

$$\begin{array}{r} + \quad = \square \\ \hline \square + \square = \square \\ \square + \square = \square \end{array}$$

$$\begin{array}{r} + \quad = \square \\ \hline \square + \square = \square \\ \square + \square = \square \end{array}$$

$$\begin{array}{r} + \quad = \square \\ \hline \square + \square = \square \\ \square + \square = \square \end{array}$$

$$\begin{array}{r} + \quad = \square \\ \hline \square + \square = \square \\ \square + \square = \square \end{array}$$

$$\begin{array}{r} + \quad = \square \\ \hline \square + \square = \square \\ \square + \square = \square \end{array}$$

$$\begin{array}{r} + \quad = \square \\ \hline \square + \square = \square \\ \square + \square = \square \end{array}$$

$$\begin{array}{r} + \quad = \square \\ \hline \square + \square = \square \\ \square + \square = \square \end{array}$$

$$\begin{array}{r} + \quad = \square \\ \hline \square + \square = \square \\ \square + \square = \square \end{array}$$

$$\begin{array}{r} + \quad = \square \\ \hline \square + \square = \square \\ \square + \square = \square \end{array}$$

$$\begin{array}{r} + \quad = \square \\ \hline \square + \square = \square \\ \square + \square = \square \end{array}$$

$$\begin{array}{r} + \quad = \square \\ \hline \square + \square = \square \\ \square + \square = \square \end{array}$$

$$\begin{array}{r} + \quad = \square \\ \hline \square + \square = \square \\ \square + \square = \square \end{array}$$

$$\begin{array}{r} + \quad = \square \\ \hline \square + \square = \square \\ \square + \square = \square \end{array}$$

Erst Zehner weg, dann Einer weg

Name:

Klasse:

Datum:

$$\begin{array}{r} - \\ \hline \square - \square = \square \\ \square - \square = \square \end{array}$$

$$\begin{array}{r} - \\ \hline \square - \square = \square \\ \square - \square = \square \end{array}$$

$$\begin{array}{r} - \\ \hline \square - \square = \square \\ \square - \square = \square \end{array}$$

$$\begin{array}{r} - \\ \hline \square - \square = \square \\ \square - \square = \square \end{array}$$

$$\begin{array}{r} - \\ \hline \square - \square = \square \\ \square - \square = \square \end{array}$$

$$\begin{array}{r} - \\ \hline \square - \square = \square \\ \square - \square = \square \end{array}$$

$$\begin{array}{r} - \\ \hline \square - \square = \square \\ \square - \square = \square \end{array}$$

$$\begin{array}{r} - \\ \hline \square - \square = \square \\ \square - \square = \square \end{array}$$

$$\begin{array}{r} - \\ \hline \square - \square = \square \\ \square - \square = \square \end{array}$$

$$\begin{array}{r} - \\ \hline \square - \square = \square \\ \square - \square = \square \end{array}$$

$$\begin{array}{r} - \\ \hline \square - \square = \square \\ \square - \square = \square \end{array}$$

$$\begin{array}{r} - \\ \hline \square - \square = \square \\ \square - \square = \square \end{array}$$

$$\begin{array}{r} - \\ \hline \square - \square = \square \\ \square - \square = \square \end{array}$$

$$\begin{array}{r} - \\ \hline \square - \square = \square \\ \square - \square = \square \end{array}$$

$$\begin{array}{r} - \\ \hline \square - \square = \square \\ \square - \square = \square \end{array}$$

$$\begin{array}{r} - \\ \hline \square - \square = \square \\ \square - \square = \square \end{array}$$

$$\begin{array}{r} - \\ \hline \square - \square = \square \\ \square - \square = \square \end{array}$$

$$\begin{array}{r} - \\ \hline \square - \square = \square \\ \square - \square = \square \end{array}$$

Erst Zehner dazu, dann Einer dazu / Verkürzte Schreibweise

Name:

Klasse:

Datum:

$$\begin{array}{r} \square + \square = \square \\ \hline \square \end{array}$$

$$\begin{array}{r} \square + \square = \square \\ \hline \square \end{array}$$

$$\begin{array}{r} \square + \square = \square \\ \hline \square \end{array}$$

$$\begin{array}{r} \square + \square = \square \\ \hline \square \end{array}$$

$$\begin{array}{r} \square + \square = \square \\ \hline \square \end{array}$$

$$\begin{array}{r} \square + \square = \square \\ \hline \square \end{array}$$

$$\begin{array}{r} \square + \square = \square \\ \hline \square \end{array}$$

$$\begin{array}{r} \square + \square = \square \\ \hline \square \end{array}$$

$$\begin{array}{r} \square + \square = \square \\ \hline \square \end{array}$$

$$\begin{array}{r} \square + \square = \square \\ \hline \square \end{array}$$

$$\begin{array}{r} \square + \square = \square \\ \hline \square \end{array}$$

$$\begin{array}{r} \square + \square = \square \\ \hline \square \end{array}$$

$$\begin{array}{r} \square + \square = \square \\ \hline \square \end{array}$$

$$\begin{array}{r} \square + \square = \square \\ \hline \square \end{array}$$

$$\begin{array}{r} \square + \square = \square \\ \hline \square \end{array}$$

$$\begin{array}{r} \square + \square = \square \\ \hline \square \end{array}$$

$$\begin{array}{r} \square + \square = \square \\ \hline \square \end{array}$$

$$\begin{array}{r} \square + \square = \square \\ \hline \square \end{array}$$

$$\begin{array}{r} \square + \square = \square \\ \hline \square \end{array}$$

$$\begin{array}{r} \square + \square = \square \\ \hline \square \end{array}$$

$$\begin{array}{r} \square + \square = \square \\ \hline \square \end{array}$$

$$\begin{array}{r} \square + \square = \square \\ \hline \square \end{array}$$

$$\begin{array}{r} \square + \square = \square \\ \hline \square \end{array}$$

$$\begin{array}{r} \square + \square = \square \\ \hline \square \end{array}$$

$$\begin{array}{r} \square + \square = \square \\ \hline \square \end{array}$$

$$\begin{array}{r} \square + \square = \square \\ \hline \square \end{array}$$

$$\begin{array}{r} \square + \square = \square \\ \hline \square \end{array}$$

$$\begin{array}{r} \square + \square = \square \\ \hline \square \end{array}$$

Erst Zehner weg, dann Einer weg / Verkürzte Schreibweise

Name:

Klasse:

Datum:

$$\begin{array}{r} \square - \square = \square \\ \hline \square \end{array}$$

$$\begin{array}{r} \square - \square = \square \\ \hline \square \end{array}$$

$$\begin{array}{r} \square - \square = \square \\ \hline \square \end{array}$$

$$\begin{array}{r} \square - \square = \square \\ \hline \square \end{array}$$

$$\begin{array}{r} \square - \square = \square \\ \hline \square \end{array}$$

$$\begin{array}{r} \square - \square = \square \\ \hline \square \end{array}$$

$$\begin{array}{r} \square - \square = \square \\ \hline \square \end{array}$$

$$\begin{array}{r} \square - \square = \square \\ \hline \square \end{array}$$

$$\begin{array}{r} \square - \square = \square \\ \hline \square \end{array}$$

$$\begin{array}{r} \square - \square = \square \\ \hline \square \end{array}$$

$$\begin{array}{r} \square - \square = \square \\ \hline \square \end{array}$$

$$\begin{array}{r} \square - \square = \square \\ \hline \square \end{array}$$

$$\begin{array}{r} \square - \square = \square \\ \hline \square \end{array}$$

$$\begin{array}{r} \square - \square = \square \\ \hline \square \end{array}$$

$$\begin{array}{r} \square - \square = \square \\ \hline \square \end{array}$$

$$\begin{array}{r} \square - \square = \square \\ \hline \square \end{array}$$

$$\begin{array}{r} \square - \square = \square \\ \hline \square \end{array}$$

$$\begin{array}{r} \square - \square = \square \\ \hline \square \end{array}$$

$$\begin{array}{r} \square - \square = \square \\ \hline \square \end{array}$$

$$\begin{array}{r} \square - \square = \square \\ \hline \square \end{array}$$

$$\begin{array}{r} \square - \square = \square \\ \hline \square \end{array}$$

$$\begin{array}{r} \square - \square = \square \\ \hline \square \end{array}$$

$$\begin{array}{r} \square - \square = \square \\ \hline \square \end{array}$$

$$\begin{array}{r} \square - \square = \square \\ \hline \square \end{array}$$

$$\begin{array}{r} \square - \square = \square \\ \hline \square \end{array}$$

$$\begin{array}{r} \square - \square = \square \\ \hline \square \end{array}$$

$$\begin{array}{r} \square - \square = \square \\ \hline \square \end{array}$$

$$\begin{array}{r} \square - \square = \square \\ \hline \square \end{array}$$

jandorfverlag, Brühl. Die Vervielfältigung dieser Vorlage für den eigenen Unterricht ist erlaubt - www.jandorfverlag.de

Rechentabellen

Name:

Klasse:










Datum:

Rechenblumen

Name:

Klasse:

Datum:



Kugelhäuser

Name:

Klasse:

Datum:

	•		=	
	•		=	
	:		=	
	:		=	

	•		=	
	•		=	
	:		=	
	:		=	

	•		=	
	•		=	
	:		=	
	:		=	

	•		=	
	•		=	
	:		=	
	:		=	

	•		=	
	•		=	
	:		=	
	:		=	

	•		=	
	•		=	
	:		=	
	:		=	

	•		=	
	•		=	
	:		=	
	:		=	

	•		=	
	•		=	
	:		=	
	:		=	

	•		=	
	•		=	
	:		=	
	:		=	

	•		=	
	•		=	
	:		=	
	:		=	

	•		=	
	•		=	
	:		=	
	:		=	

	•		=	
	•		=	
	:		=	
	:		=	

Malreihen

Name:

Klasse:

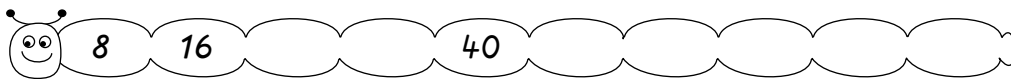
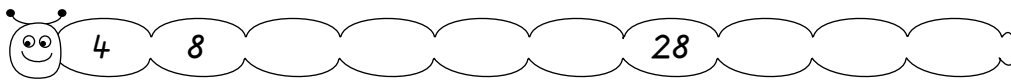
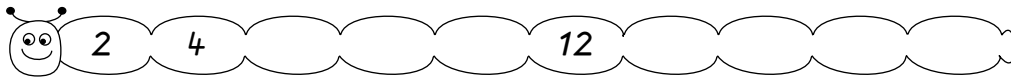
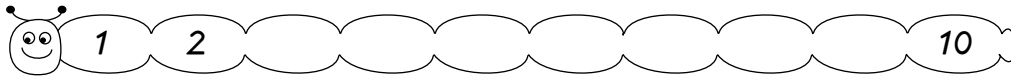
Datum:

Zahlenreihen

Name:

Klasse:

Datum:



Zahlenreihen

Name:

Klasse:

Datum:

